


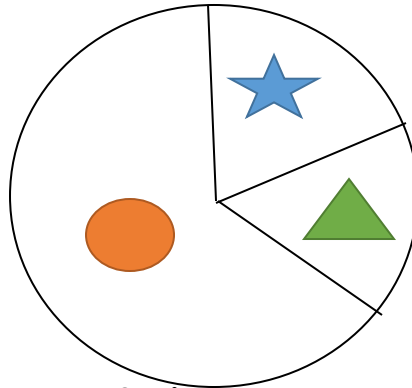


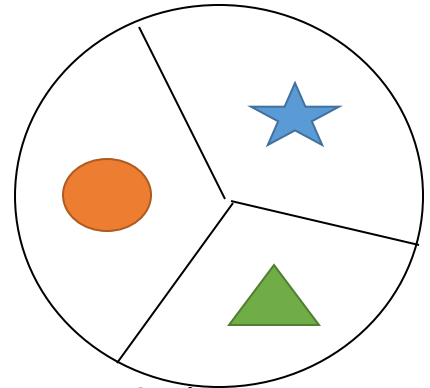
## Part B – Problem Solving

1. Match the tally chart to the spinner you think it belongs to. Tell why you think that.

Pattern	Tally
	III
	IIII IIII II
	III






Spinner A

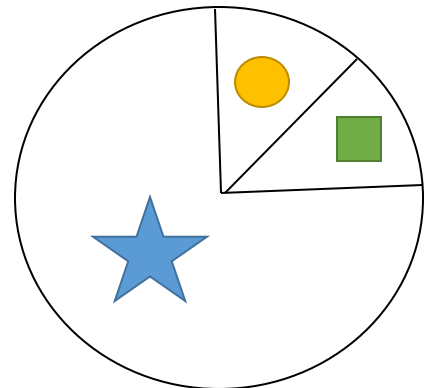
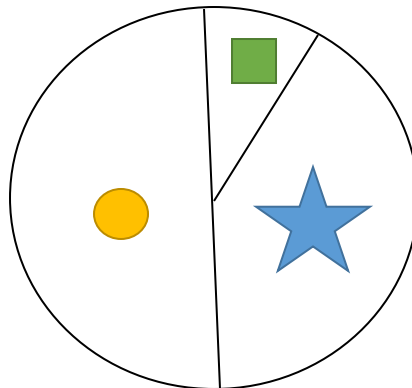


Spinner B

I think the tally chart matches spinner \_\_\_\_\_ because \_\_\_\_\_

---

Pattern	Tally
	I
	IIII IIII IIII
	II



I think the tally chart matches spinner \_\_\_\_\_ because \_\_\_\_\_

---