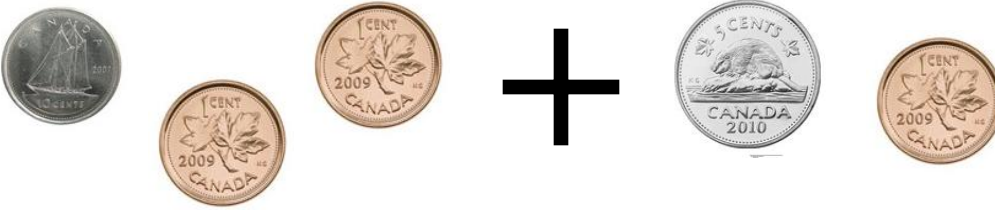



3. Add or subtract the money amounts. Show your work.

a)



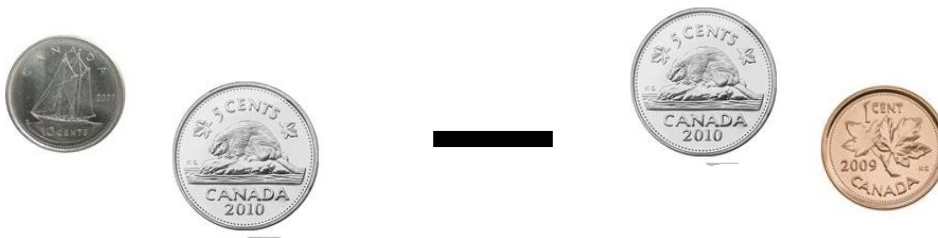
$$\underline{\hspace{1cm}} \text{¢} + \underline{\hspace{1cm}} \text{¢} = \underline{\hspace{1cm}} \text{¢}$$

b)



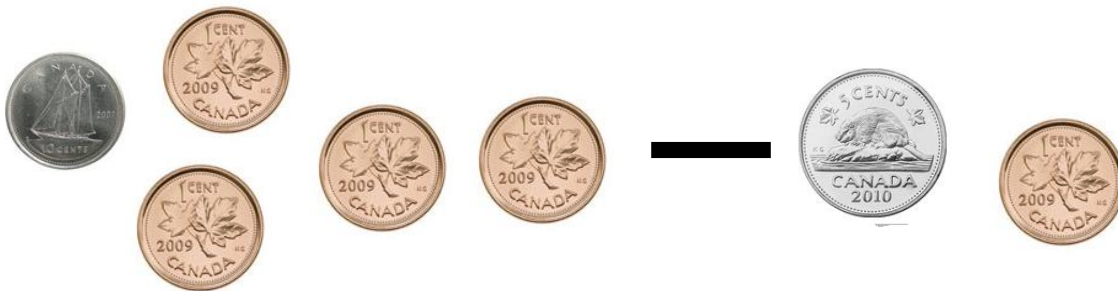
$$\underline{\hspace{1cm}} \text{¢} + \underline{\hspace{1cm}} \text{¢} = \underline{\hspace{1cm}} \text{¢}$$

c)



$$\underline{\hspace{1cm}} \text{¢} - \underline{\hspace{1cm}} \text{¢} = \underline{\hspace{1cm}} \text{¢}$$

d)



$$\underline{\hspace{1cm}} \text{¢} - \underline{\hspace{1cm}} \text{¢} = \underline{\hspace{1cm}} \text{¢}$$